

Name: \_\_\_\_\_

Date: \_\_\_\_\_

Period: \_\_\_\_\_

## 1800: A New Century

Directions: Color, outline, shade, and label the following items onto the blank map on the back of this page.

Resources: • Rand McNally *History Atlas* (**RM**), & *American Nation* textbook (**AN**)

A. Using **AN277**, label the names of the 16 states that existed in 1800. You may use the postal codes for the states if you wish (leave Maine unlabeled).

VT NH NY MA CT RI PA MD NJ DE VA NC SC GA KY TN

B. Using **RM29b**, *lightly* shade and label the following political regions:

The United States (light **blue**)

Spanish Louisiana & Florida (light **green**)

British Lands (light **red**)

\*light **blue** for all three of these areas

Land Claimed by Georgia\* The Northwest Territory\* Mississippi Territory \*

C. Using **RM29b**, determine which dots on your map indicate each of the following towns. Label them accordingly and color them black.

Philadelphia

Boston

New York

Baltimore

Richmond

Charleston

Savannah

Pittsburgh

Cincinnati

Detroit

Louisville

Nashville

Lexington

Frankfort

St. Louis

D. Using **RM29b** and **32a**, Determine which squares on your map indicate each of the following British forts. Label them accordingly and color them **red**.

Ft. Point-au-Fer

Ft. Oswego

Ft. Niagra

Ft. Miami

Ft. Greenville

Ft. Wayne

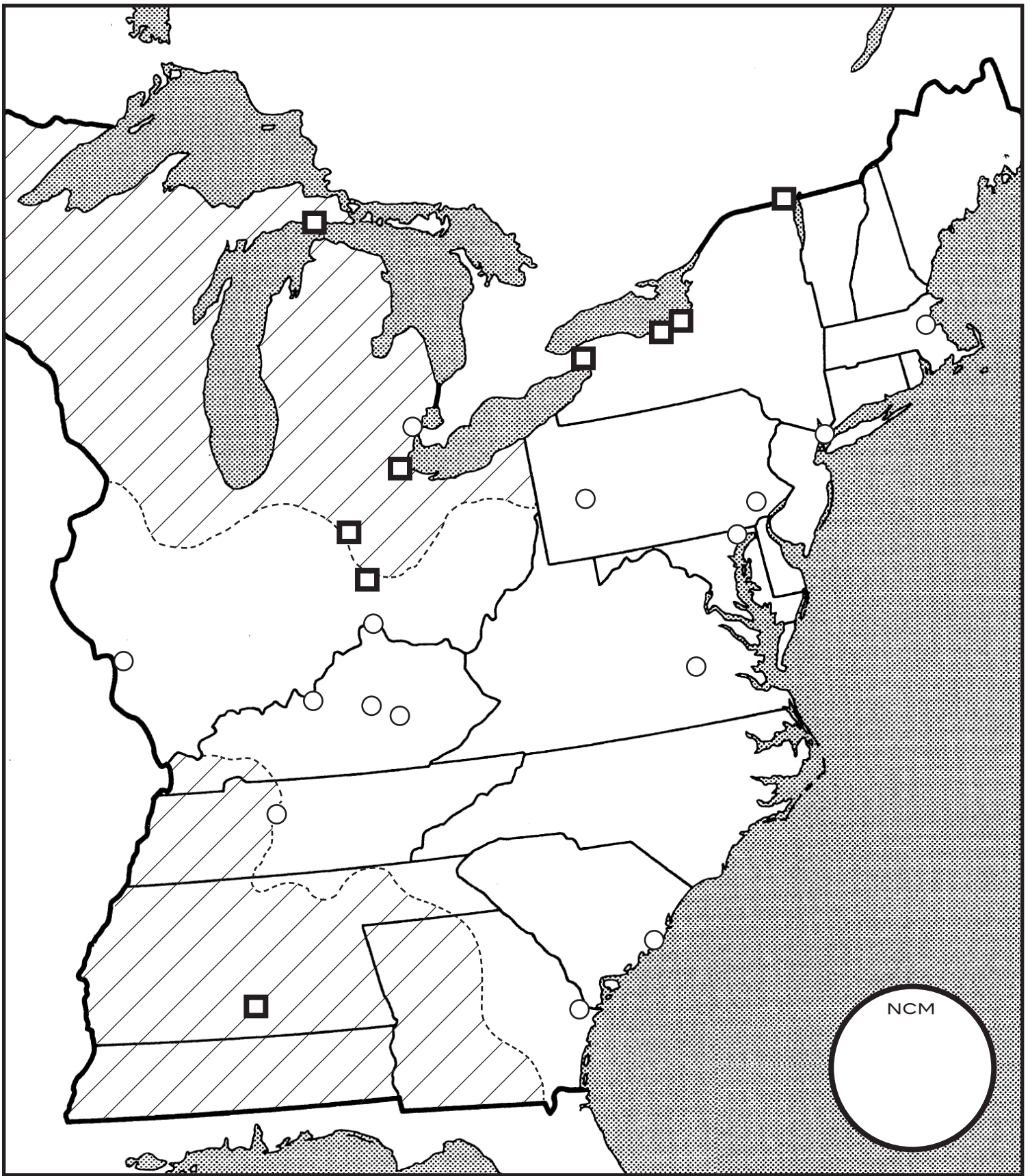
Ft. Mackinac




Ft. Ontario



Ft. Confederacion (Spanish; color **green**)

E. Using **RM29b** as a reference, use alternating **red** & **blue** to color the area that was disputed with the British. Use alternating **green** & **blue** to color the area that was disputed with the Spanish. (See the sample map if this is confusing.)

F. Complete the key located below the map.



 U.S. States & Territories  
 U.S. Claims Disputed with Britain  
 U.S. Claims Disputed with Spain

 British Lands  
 Spanish Lands

 U.S. Towns  
 British Forts  
 Spanish Forts